

# Weekly Maths

---

YEAR 2

WEEK 1

## Summer 2

This term we are going to focus on Money and Time. We will continue to use the same structure for the week but change the focus from arithmetic.



---

Think about which coins you will need to make amounts.  
For example; to make the amount 12p you could use a 10p and  
a 2p.

# Day 1

---

YEAR 2

WEEK 1



## Week 1 – Day 1

$$\text{A. } 5p + 5p =$$

$$\text{B. } 2p + 10p =$$

$$\text{C. } 10p - 5p =$$



## Week 1 – Day 1

$$D. 20p - 2p =$$

$$E. 50p + 1p + 1p =$$

$$F. 15p - 5p =$$



## Week 1 – Day 1

G.

**I** Max has these coins.



His mum gives him **four** of these coins.



Max now has 80 pence.

Which coins did Max's mum give him?



## Week 1 – Day 1 Answers

- A. 10p
- B. 12p
- C. 5p
- D. 18p
- E. 52p
- F. 10p
- G. 20p, 2p, 2p, 1p



# Day 2

---

YEAR 2

WEEK 1



## Week 1 – Day 2

$$A. 50p + 10p =$$

$$B. 5p + 5p + 2p =$$

$$C. 20p + 12p =$$



## Week 1 – Day 2

$$D. 7p - 5p =$$

$$E. 25p - 3p =$$

$$F. 60p - 10p =$$



## Week 1 – Day 2

G.

Leo saves this money each day.



Leo wants to buy these items.



How many days will it take Leo to buy both items?



## Week 1 – Day 2 Answers

- A. 60p
- B. 12p
- C. 32p
- D. 2p
- E. 22p
- F. 50p
- G. 11

# Day 3

---

YEAR 2

WEEK 1



## Week 1 – Day 3

$$\text{A. } 100\text{p} + 10\text{p} =$$

$$\text{B. } \text{£}1 + \text{£}2 =$$

$$\text{C. } 72\text{p} + 2\text{p} + 1\text{p} =$$



## Week 1 – Day 3

$$D. 75p - 20p =$$

$$E. 100p - 25p =$$

$$F. £2 - £1 \text{ and } 5p =$$





## Week 1 – Day 3

G.

John has these coins.



He gives his friend a quarter of the money.

How much money does he have left?



## Week 1 – Day 3

### Answers

- A. £1 and 10p or 110p or £1.10
- B. £3 or 300p or £3.00
- C. 75p
- D. 55p
- E. 75p
- F. 95p or £0 and 95p
- G. 18p

# Day 4

---

YEAR 2

WEEK 1



## Week 1 – Day 4

$$A. 5p + 5p + 5p + 5p =$$

$$B. 50p + 20p =$$

$$C. \text{£}1 + 20p + 1p =$$



## Week 1 – Day 4

$$D. 100p - £1 =$$

$$E. 18p - 5p =$$

$$F. 22p - 5p =$$



# Week 1 – Day 4

G.

Use comparison symbols  $>$ ,  $<$  or  $=$  to compare the coins.

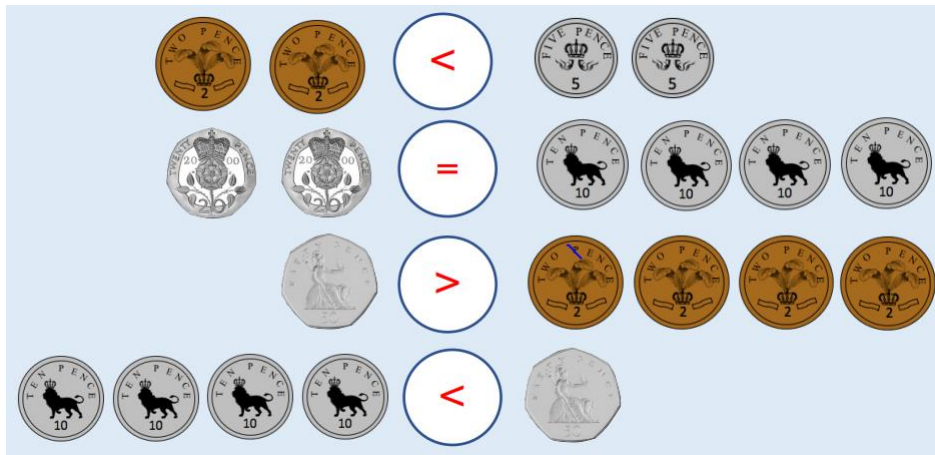




# Week 1 – Day 4

## Answers

- A. 20p
- B. 70p
- C. £1 and 21p or 121p or £1.21
- D. 0p
- E. 13p
- F. 17p
- G.
- H.



# Day 5

---

YEAR 2

WEEK 1





## Week 1 – Day 5

$$\text{A. } 21\text{p} + 80\text{p} =$$

$$\text{B. } 100\text{p} + 100\text{p} + \text{£}2 =$$

$$\text{C. } 1\text{p} + 58\text{p} =$$



## Week 1 – Day 5

$$D. \text{£}5 - \text{£}2 =$$

$$E. \text{£}5 \text{ and } 10\text{p} - 10\text{p} =$$

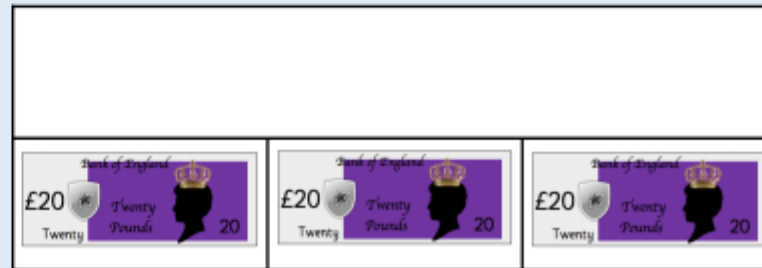

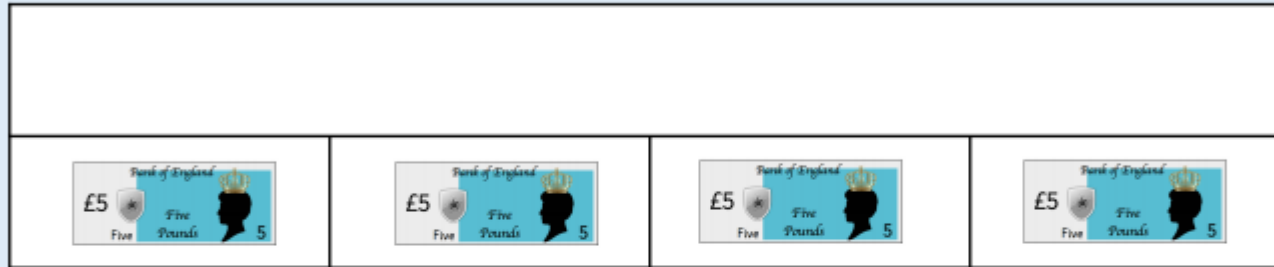
$$F. 20\text{p} + 5\text{p} + 7\text{p} =$$



# Week 1 – Day 5

## G.

Complete the bar models.









# Week 1 – Day 5

## Answers

- A. £1 and 1p or 101p or £1.01
- B. £4 or 400p
- C. 59p
- D. £3 or 300p
- E. £5 or 500p
- F. 32p
- G.

Complete the bar models.

20			
			

20		60		
